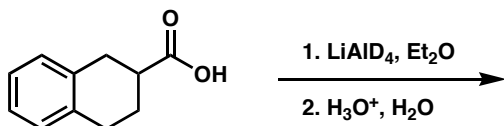


Chem 41c Quiz 3

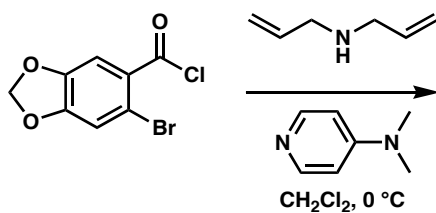
Stoltz, Spring 2005
April 25, 2005

Predict the products (if any) of the following reactions: (5 points each)

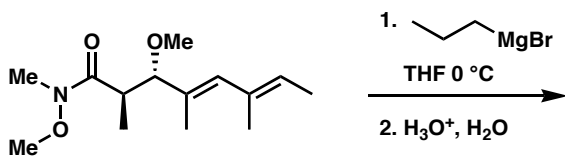
1.



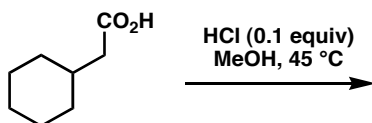
2.



3.



4.



Bonus (5 points)

Provide a mechanistic rationale for the product formed in problem 3.