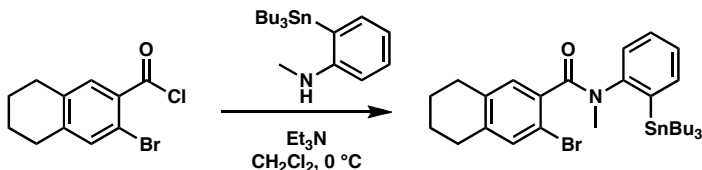


Chem 41c Quiz 3

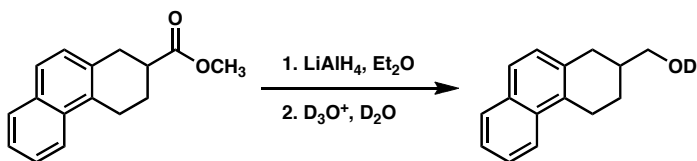
Stoltz, Spring 2006
April 24, 2006

Predict the products (if any) of the following reactions: (5 points each)

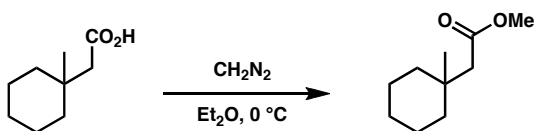
1.



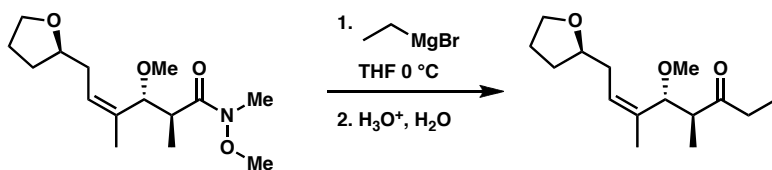
2.



3.



4.



Bonus (5 points)

What would you expect to form if the product from #1 were treated with $\text{Pd(PPh}_3)_4$?

