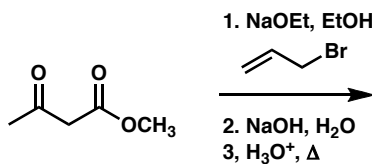


# Chem 41c Quiz 4

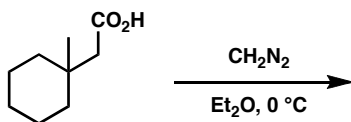
Stoltz, Spring 2006  
April 28, 2006

Predict the products (if any) of the following reactions: (5 points each)

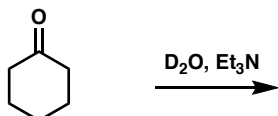
1.



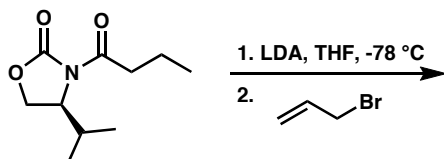
2.



3.



4.



**Bonus (5 points)**

What is the structure of LDA?