

Chem 41c Quiz 3

Stoltz, Spring 2007

April 20, 2007

Due April 23, 2007 9:55 AM

You have 25 min to take this quiz. It is closed note, closed book, and no collaboration is allowed. Please do not discuss the quiz with anyone until you receive it back graded. There is no partial credit. Please **BOX** your answer for each question.

*Do Not Open until you are Ready
to take the Quiz. Once you open
this you have 25 min.*

Chem 41c Quiz 3

Stoltz, Spring 2007

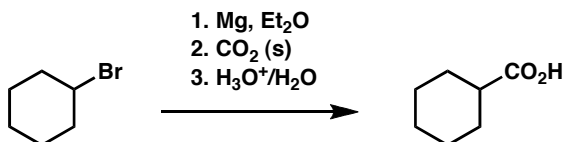
April 20, 2007

Due April 23, 2007 9:55 AM

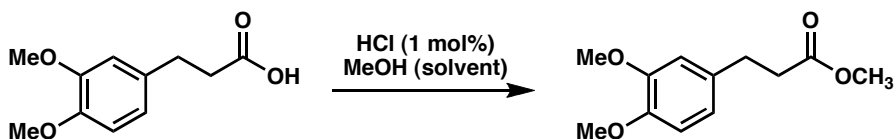
You have 25 min to take this quiz. It is closed note, closed book, and no collaboration is allowed. Please do not discuss the quiz with anyone until you receive it back graded. There is no partial credit. Please **BOX** your answer for each question.

Predict the products of each reaction. (5 points each)

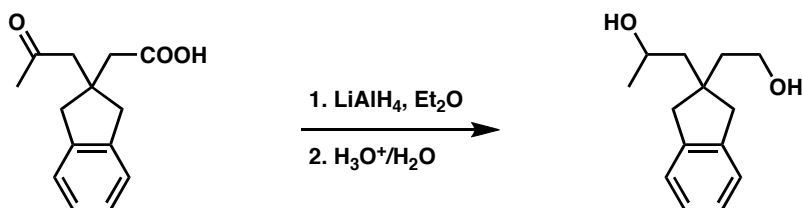
1.



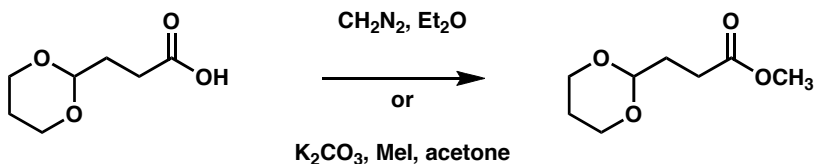
2.



3.

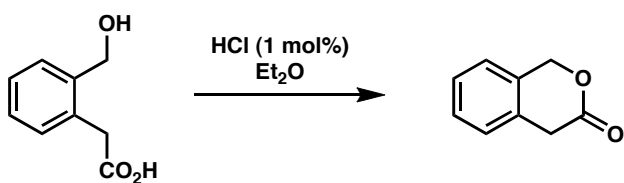


4. Provide a reagent or reagents to accomplish the following transformation.



Bonus (5 points)

Predict the product of the following reaction.



<http://www.ktf-split.hr/periodni/en/>

(1) Pure Appl. Chem., 73, No. 4, 667-683 (2001)
Relative atomic mass is shown with five significant figures. For elements having no stable nuclides, the value enclosed in brackets indicates the mass number of the longest-lived isotope of the element.
However three such elements (Th, Pa, and U) do have a characteristic terrestrial isotopic composition, and for these an atomic weight is tabulated.

[illegible]